



EXAMINATIONS COUNCIL OF ESWATINI
Junior Certificate Examination

CANDIDATE
NAME

CENTRE
NUMBER

--	--	--	--

CANDIDATE
NUMBER

--	--	--	--

GEOGRAPHY PAPER 1

527/01

October/November 2021

1 hours 45 minutes

Candidates answer on the Question Paper.
No additional materials required.

READ THESE INSTRUCTIONS FIRST

Write your name, Centre number and candidate number in the spaces provided.

Write in **dark blue** or **black** pen.

You may use a soft pencil for any diagrams, graphs, tables or rough working.

Do not use staples, paper clips, highlighters, glue or correction fluid.

Answer **three** questions. Choose **one** question from each section.

Sketch maps and diagrams should be drawn wherever they serve to illustrate an answer.

The number of marks is given in brackets [] at the end of each question or part question.

For Examiner's Use	
SECTION A	
Question 1	
Question 2	
SECTION B	
Question 3	
Question 4	
SECTION C	
Question 5	
Question 6	
TOTAL	

This document consists of **17** printed pages and **3** blank pages.

SECTION A – Eswatini

Answer **one** question from this section

1 (a) Eswatini has different types of soils.

(i) Name the physiographic region that has mostly acidic soils.

..... [1]

(ii) Mention **two** other soil types that are found in Eswatini.

1

2 [2]

(iii) Explain **two** reasons why some soils in Eswatini are acidic?

1

.....

.....

2

.....

..... [4]

(b) Study Fig. 1 which shows diagrams of **three** types of mining.

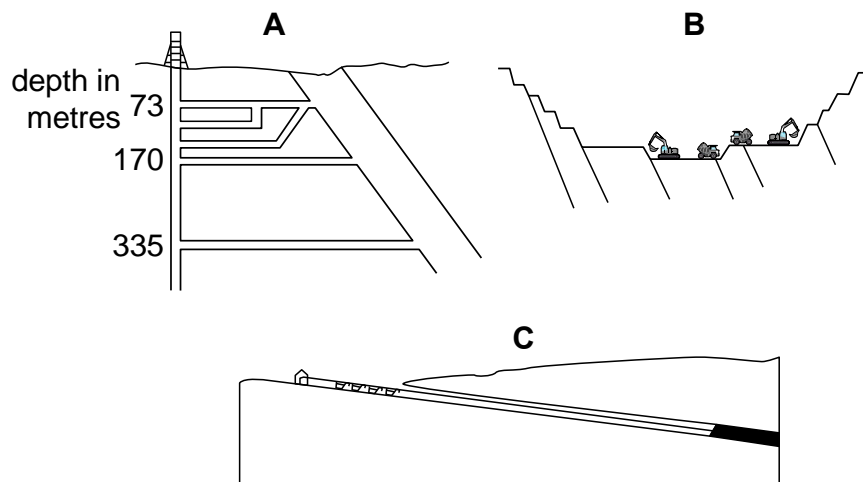


Fig. 1

(i) Name the types of mining shown as A, B and C.

A.....

B.....

C..... [3]

(ii) Mention any **two** areas where coal deposits are found in Eswatini.

1

2 [2]

(iii) State any **two** economic uses of coal.

1

2 [2]

(c) Suggest any **three** negative impacts of mining on people.

1

.....

.....

.....

2

.....

.....

.....

3

.....

.....

..... [6]

[Total: 20 marks]

2 (a) Most people of Eswatini rear cattle on a large scale.

(i) Name the main region where cattle farming is mainly practiced in Eswatini.

..... [1]

(ii) Mention any **two** outputs of subsistence cattle farming.

1

2 [2]

(iii) Explain any **two** problems faced by subsistence cattle farmers in Eswatini

1

.....

.....

2

.....

..... [4]

- (b) Study Fig. 2, which shows places where commercial farming is practiced.
 (i) Name the cash crops grown in the places marked **D**, **E** and **F**.

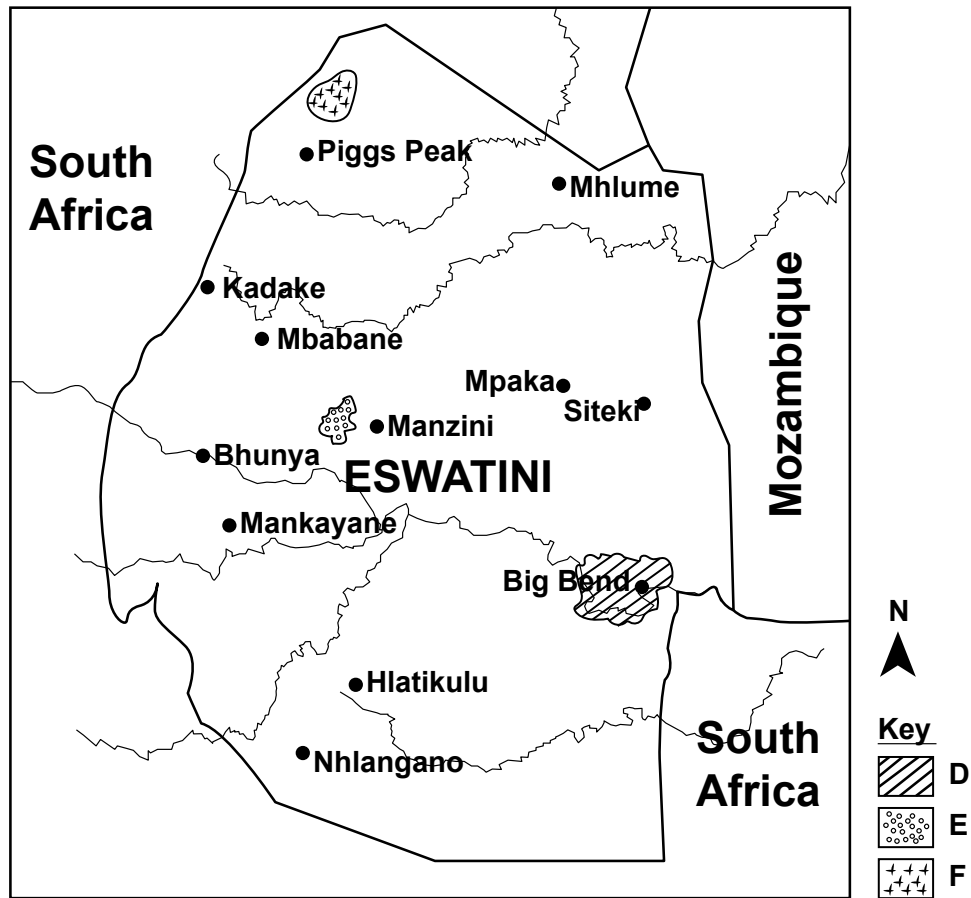


Fig. 2

- D**
- E**
- F** [3]

- (ii) State any **two** physical factors that promote the growing of one of the cash crops named above.

- 1**
-
- 2**
- [2]

- (iii) Mention any **two** problems faced by growers of the cash crop identified above.

- 1**
- 2** [2]

(c) Explain **three** problems encountered in preparing virgin land for agriculture in Eswatini.

1

.....

.....

.....

2

.....

.....

.....

3

.....

.....

..... [6]

[Total: 20 marks]

SECTION B – SADC

Answer **one** question from this section

3 (a) South Africa is well known for coastal tourism.

(i) What is coastal tourism?

..... [1]

(ii) Mention any **two** coastal tourism activities in South Africa.

1

2 [2]

(iii) Explain **two** factors that promote the growth of coastal tourism in South Africa.

1

.....

.....

2

.....

..... [4]

(b) Study Fig. 3, which shows the political regions/ provinces of South Africa.

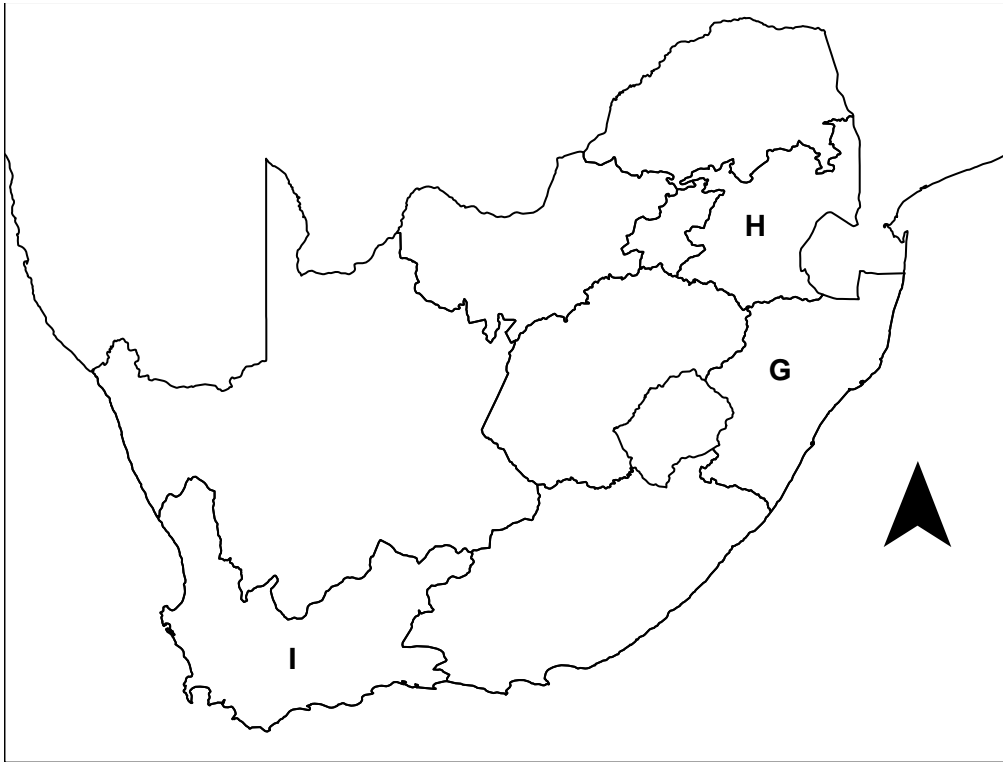


Fig. 3

(i) Name the political regions shown in the map as, **G**, **H** and **I**.

G

H

I [3]

(ii) Mention any **two** factors that affect the climate of South Africa.

1

2 [2]

(iii) State any **two** uses of wheat.

1

2 [2]

(c) Suggest **three** problems faced by wheat farmers in South Africa.

1

.....

.....

.....

2

.....

.....

.....

3

.....

.....

..... [6]

[Total: 20 marks]

4 (a) Lesotho has two physiographic regions.

(i) Name the physiographic region that is found on the Eastern part of Lesotho.

.....[1]

(ii) State any **two** crops grown in Lesotho.

1

2 [2]

(iii) Explain **two** factors that limit the growth of crops in the Eastern part of Lesotho.

1

.....

.....

2

.....

..... [4]

(b) Study Fig. 4 which shows the geographical location of Namibia.

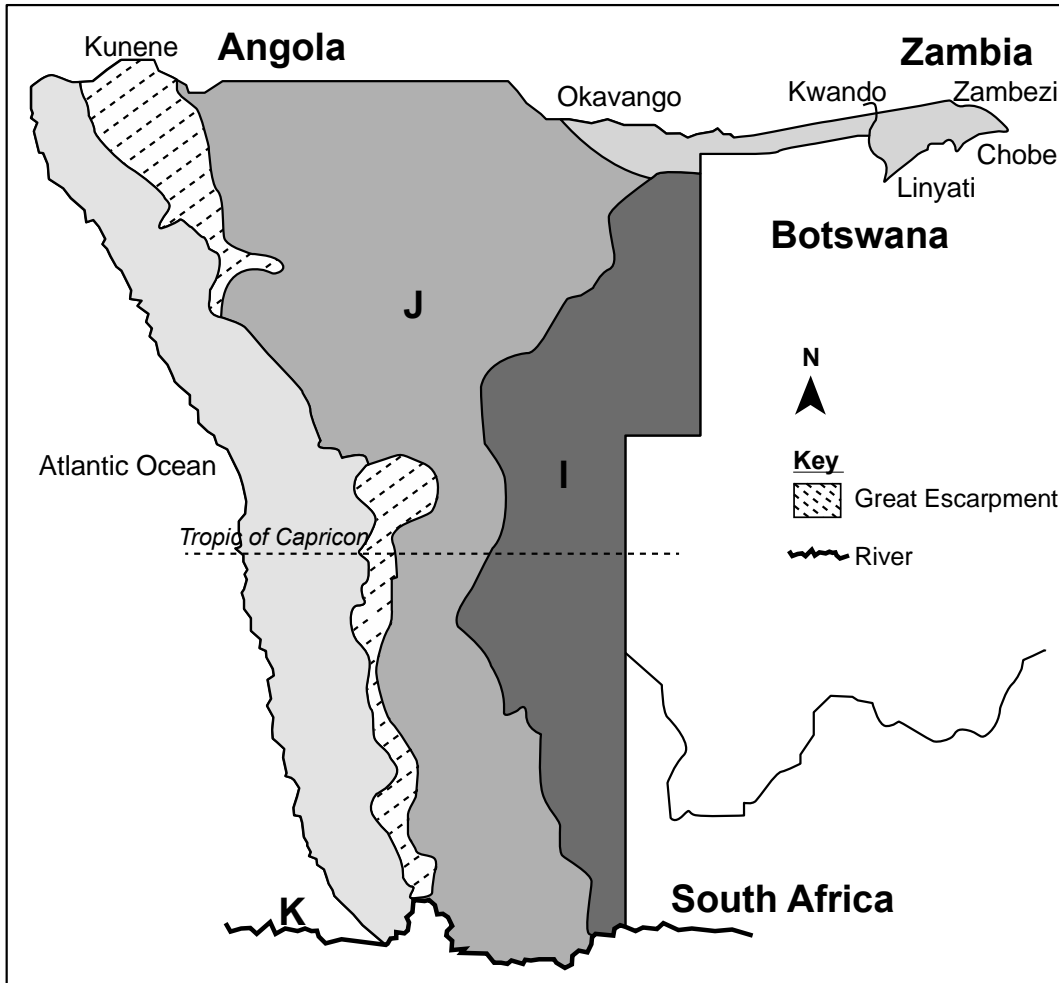


Fig. 4

(i) Name the features marked as I, J and K in Fig. 4.

- I
- J
- K [3]

(ii) State any **two** factors that influence the drainage pattern in Namibia.

- 1
-
- 2
- [2]

(iii) Mention any **two** sources of water in Namibia.

- 1
-
- 2
- [2]

(c) Suggest **three** factors that affect cattle distribution in Botswana.

- 1
-
-
-
- 2
-
-
-
- 3
-
-
- [6]

[Total: 20 marks]

SECTION C- Countries outside Africa

Answer **one** question from this section

5 (a) The people of Japan practice crop farming and they grow a variety of crops.

(i) Name the crop that is grown in the steep slopes of Japan.

..... [1]

(ii) Mention any **two** other crops grown in Japan.

1

2 [2]

(iii) Explain the importance of the use of machinery in Japan's agriculture.

1

.....

.....

.....

2

.....

.....

..... [4]

(b) Study Fig. 5, which shows the processes of dairy farming in the Netherlands.

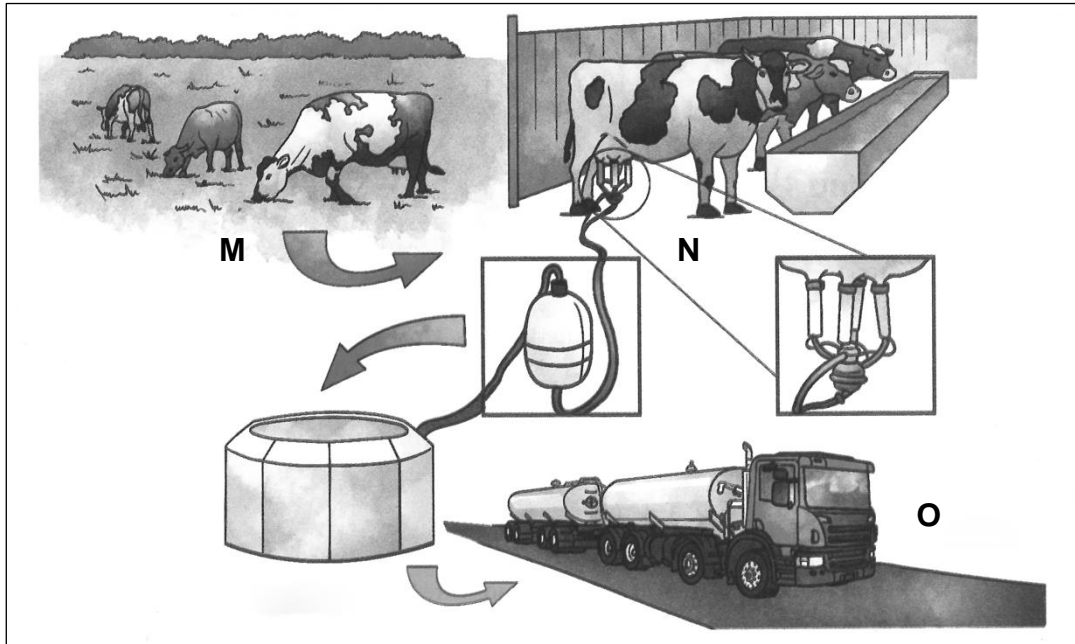


Fig. 5

(i) Name the processes shown as **M**, **N** and **O** .

M

N

O [3]

(ii) State **two** advantages the dairy cattle in the Netherlands have on the environment.

1

.....

2

..... [2]

(iii) Mention **two** advantages the dairy cows have for milk production.

1

.....

2

..... [2]

(c) Suggest **three** solutions to the problems facing the fishing industry of Japan.

1

.....

.....

.....

2

.....

.....

.....

3

.....

.....

..... [6]

[Total: 20 marks]

6 (a) India is the main producer of tea in the world.

(i) Name the largest tea growing region of India.

..... [1]

(ii) State any **two** uses of tea by-products.

1

2 [2]

(iii) Explain any **two** economic factors that promote the growth of tea in India.

1

.....

.....

.....

3

.....

.....

..... [4]

(b) Study Fig. 6 which shows stages of rubber processing in Brazil.

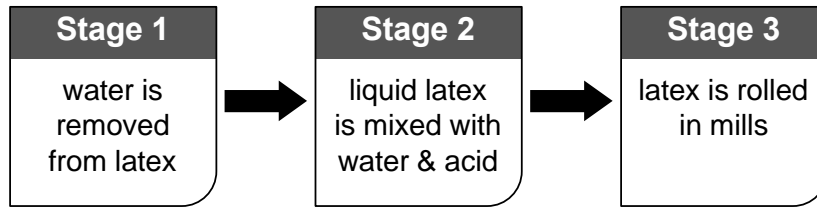


Fig. 6

(i) Name the processes that take place in each of the stages shown in Fig. 6.

Stage 1..... [3]

Stage 2.....

Stage 3..... [3]

(ii) State any **two** rubber products.

1

2 [2]

(iii) Mention **two** advantages of artificial rubber over natural rubber.

1

2 [2]

(c) Explain **three** problems experienced by the Brazilians who exploit the tropical rain forest.

1

.....

.....

.....

2

.....

.....

.....

3

.....

.....

..... [6]

[Total: 20 marks]

Permission to reproduce items where third-party owned material protected by copyright is included has been sought and cleared where possible. Every reasonable effort has been made by the publisher (ECESWA) to trace copyright holders, but if any items requiring clearance have unwittingly been included, the publisher will be pleased to make amends at the earliest possible opportunity.